

# Represent and composition 1,2,3

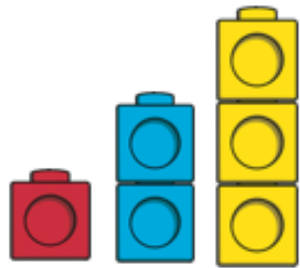
more

fewer

same

1 more

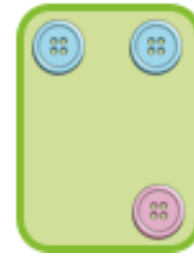
1 less



2



2



3



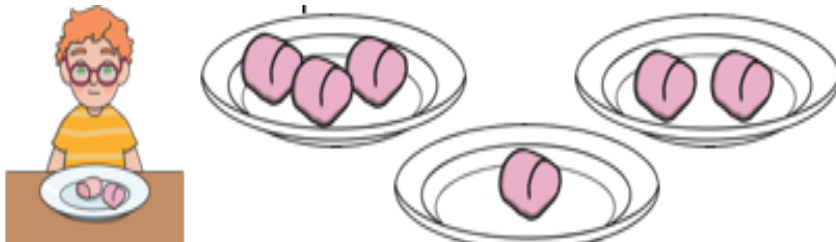
3

1	2	3	4	5
•	••	•••	••••	•••••

Which shape will make 3? Is there more than one way?

Which tower is showing 1 more than 2? Which tower is showing 1 less than 3? Which colour tower has more cubes than the blue tower?

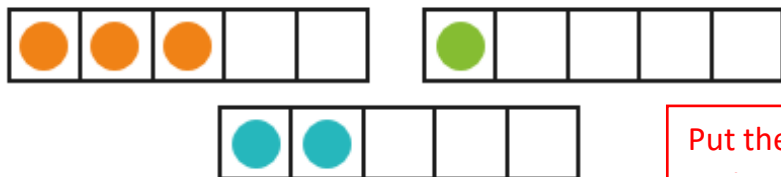
Which buttons show...? What can you see about the different coloured buttons?



Which plate has the same? more?



How can she put 3 flags on 2 castles? How many different ways can you find?



Put the five frames in order starting

$$0+3=3 \quad 2+1=3$$

$$1+2=3 \quad 3+0=3$$